

Sample Maths Items – 2<sup>nd</sup> Class – NA '14 Released

---

**S1.**

$17 + 13 + 20 =$

i004

82% of pupils answered this item correctly

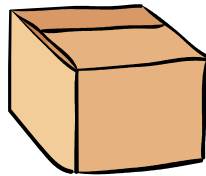
**S2.**

$90 - 46 =$

i006

51% of pupils answered this item correctly

**S3.** Which of these 3-D shapes does NOT have a flat face?



i015

90% of pupils answered this item correctly

**S4.** Draw a line through this shape to make a rectangle and a triangle.



i050

82% of pupils answered this item correctly

**S5.** Paul has 17 stickers. Alex has 6 more stickers than Paul. Which of these tells how many stickers the children have altogether?

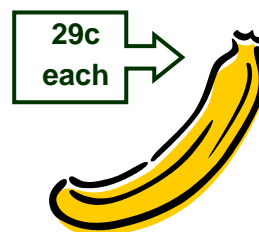

- $23 - 17$
- $17 + 17 + 6$
- $17 + 6$
- $17 + 17 - 6$



i112

17% of pupils answered this item correctly

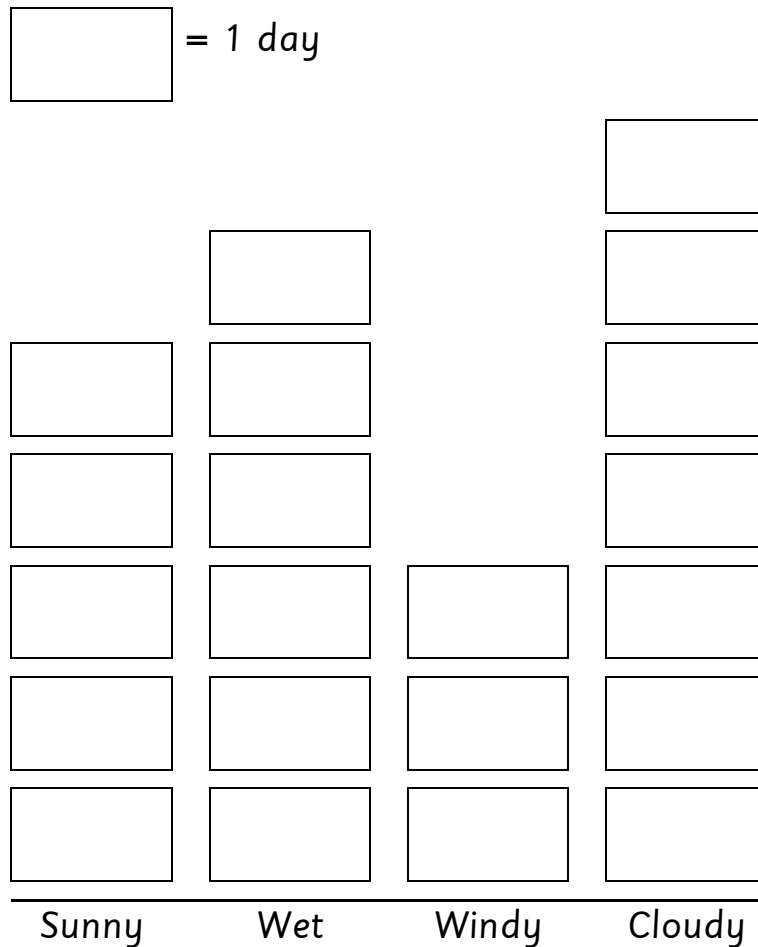
**S6.** Kate has 1 euro. She uses it to buy 2 bananas. How much money has she left?



i039

20% of pupils answered this item correctly

Children in Second class made a chart of the weather for the school days in March. Each block stands for 1 school day. Use the chart to answer questions 18 to 20.



**S7.** How many school days were there in March?

i099

74% of pupils answered this item correctly

**S8.** How many more wet days were there than windy days?

i100

82% of pupils answered this item correctly