

## 2nd class: Items used in the Main Study

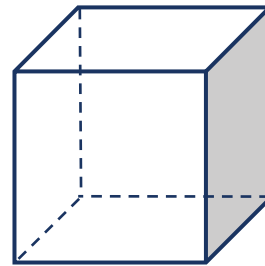
S1. 
$$\begin{array}{r} 70 \\ - 24 \\ \hline \end{array}$$

**55% of pupils answered this item correctly**

i009

S2. Which of these do all cubes have?

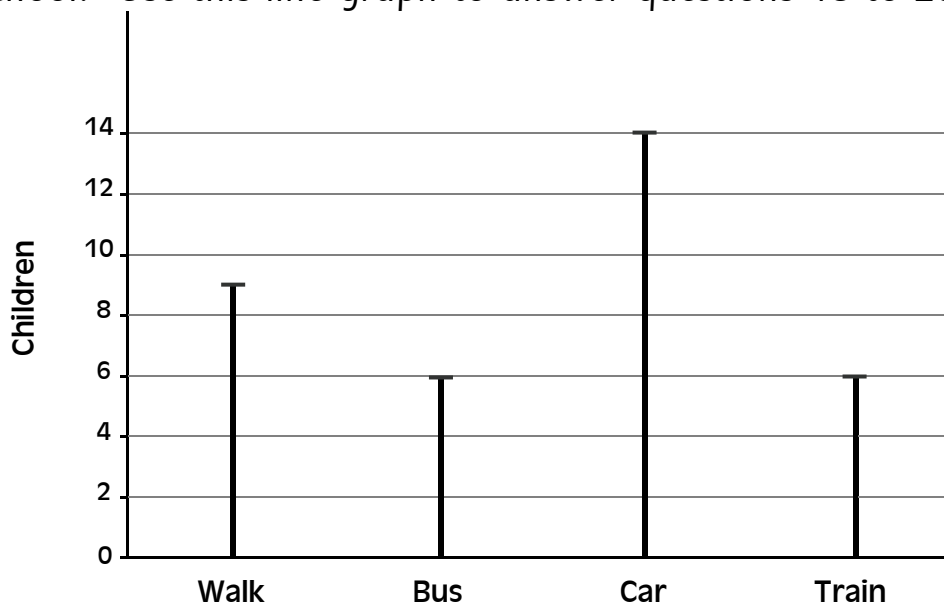
- 4 faces
- 8 corners
- 6 edges
- 12 faces



**66% of pupils answered this item correctly**

i011

The line graph shows the different ways pupils in Third class travel to school. Use this line graph to answer questions 18 to 20.



S3 How many more children travel by car than by train?

**39% of pupils answered this item correctly**

i020

## 2nd class: Items used in the Main Study

---

- S4. There are 30 children in Second class. Yesterday at lunchtime, 12 of them played skipping, 9 played basketball and the rest played football. How many children played football?

children



i028

**43% of pupils answered this item correctly**

---

- S5. I have 20c, 20c, and 5c. If an apple costs 15c, how many apples could I buy with my money?




i038

**42% of pupils answered this item correctly**

---

- S6. Colour in half of this shape.



i070

**94% of pupils answered this item correctly**

---

## 2nd class: Items used in the Main Study

---

S7. Jane's birthday is on the 14<sup>th</sup> of March. Jack's birthday is five months later. In what month is Jack's birthday?



i075

**65% of pupils answered this item correctly**

---

S8. Which of these gives the best guess of  $86 - 59$ ?

- 70 – 50
- 90 – 60
- 80 – 60
- 80 – 70

i086

**25% of pupils answered this item correctly**

---